



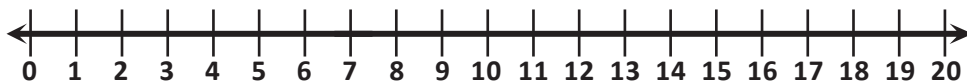
NAME _____

DATE _____

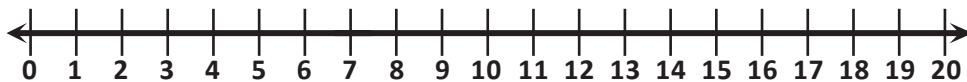
ADDITION ON NUMBER LINE

Show each problem on number line and write the correct answer.

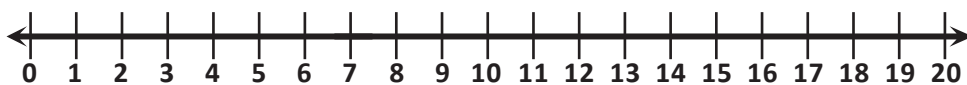
$2 + 1 =$



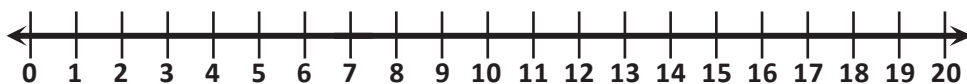
$2 + 2 =$



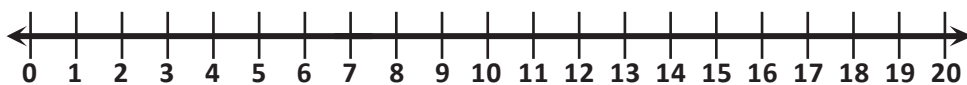
$2 + 3 =$



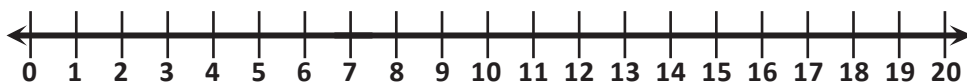
$2 + 4 =$



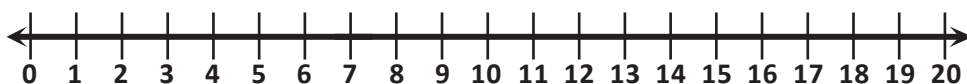
$2 + 5 =$



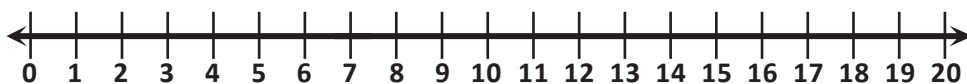
$2 + 6 =$



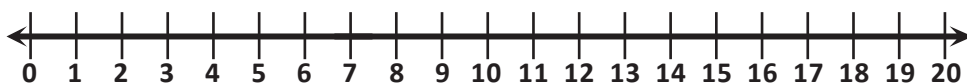
$2 + 7 =$



$2 + 8 =$



$2 + 9 =$



$2 + 10 =$

