

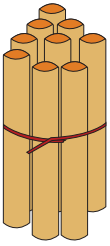


NAME _____

DATE _____

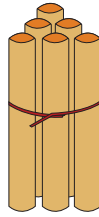
ADDITION

Count the sticks, add and write the correct number.



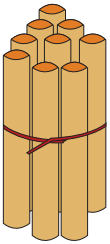
9

+



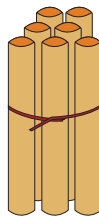
6

=



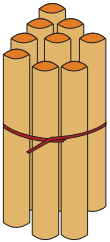
9

+



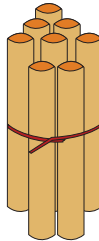
7

=



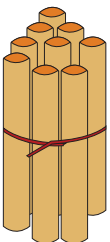
9

+



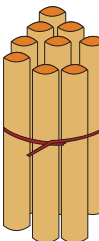
8

=



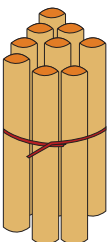
9

+



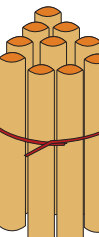
9

=



9

+



10

=