




NAME _____

DATE _____

SUBTRACTION

Subtract the given numbers by crossing out the objects.

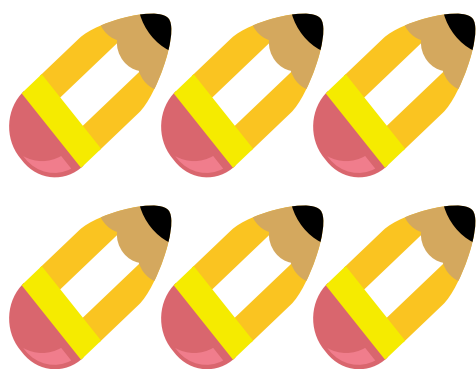
Example:




$$6 - 1 = 5$$




$$8 - 4 = \square$$



$$6 - 5 = \square$$



$$4 - 2 = \square$$



$$3 - 1 = \square$$



$$6 - 3 = \square$$