



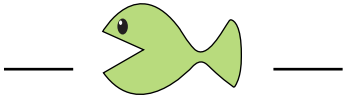
NAME \_\_\_\_\_

DATE \_\_\_\_\_


## COMPARING NUMBERS

Write the number in the blanks so that the fish is eating the greater number.


a) 26 15




b) 17 12



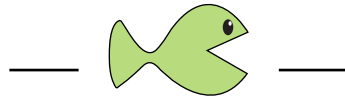
c) 24 19




d) 18 27



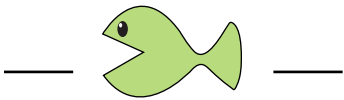
e) 16 12




f) 13 18




g) 17 11




h) 28 21




i) 35 26




j) 32 33



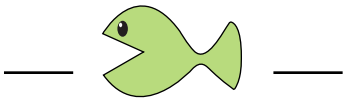
k) 37 18



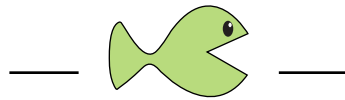
l) 26 16



m) 40 28



n) 19 18



o) 23 32

