



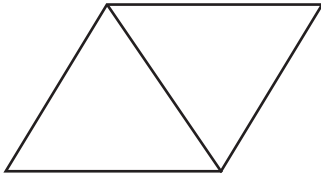
NAME _____

DATE _____

SYMMETRY

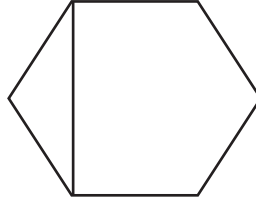
Are the shapes divided into equal parts? Write yes (Y) or no (N). If the shape has equal parts, write how many equal parts on the line.

1)



____ _

2)



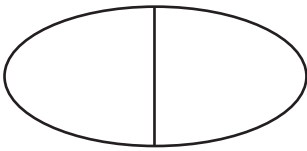
____ _

3)



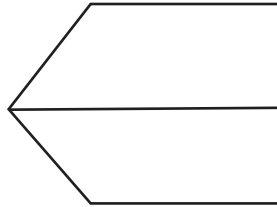
____ _

4)



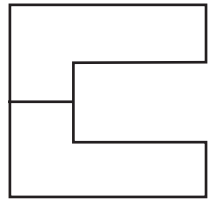
____ _

5)



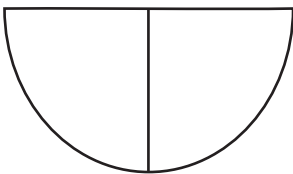
____ _

6)



____ _

7)



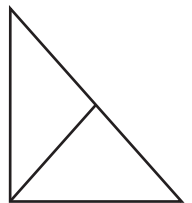
____ _

8)



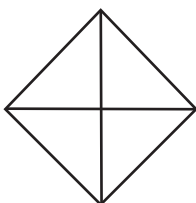
____ _

9)



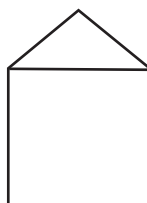
____ _

10)




____ _

11)



____ _

12)



____ _