

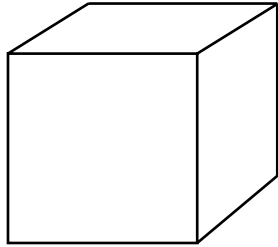


NAME _____ DATE _____

FACES, EDGES AND VERTICES

Write the name of each shape. Also find the number of faces, edges and vertices.

Example:



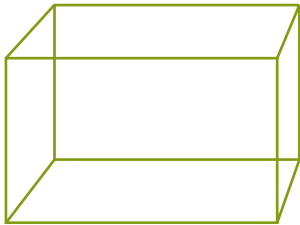
6 faces.

12 edges.

8 vertices.

Name: Cube

1)



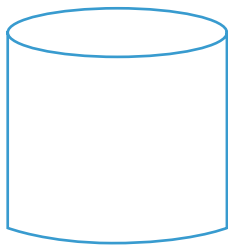
___ faces.

___ edges.

___ vertices.

Name: _____

2)



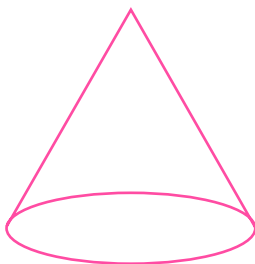
___ faces.

___ edges.

___ vertices.

Name: _____

3)



___ faces.

___ edges.

___ vertices.

Name: _____