

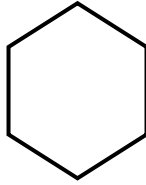
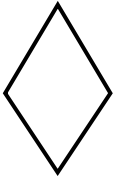


NAME \_\_\_\_\_ DATE \_\_\_\_\_

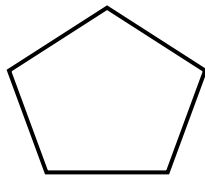
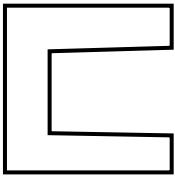
## COMPARE EDGES, VERTICES AND FACES

Tick (✓) on the correct shape.

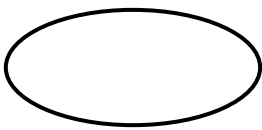
1) Which shape has more corners?



2) Which shape has more sides?



3) Which shape has more corners?



4) Which shape has more sides?

