




NAME _____ DATE _____

IDENTIFY 2-DIMENSIONAL SHAPES

Which shape is this?

Example:




Triangle

Rectangle

Square

1)



Triangle

Rectangle

Square

2)



Triangle

Rectangle

Square

3)




Rectangle

Rhombus

Square

4)



Rhombus

Circle

Oval