

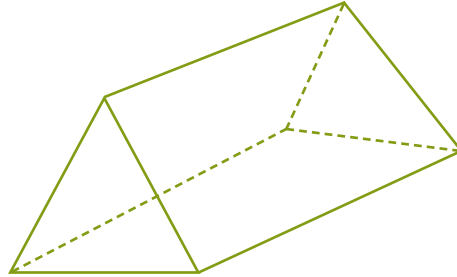


NAME \_\_\_\_\_ DATE \_\_\_\_\_

## SOLID GEOMETRY FIGURES

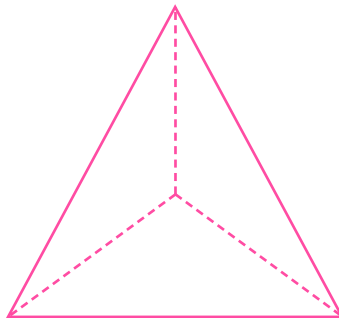
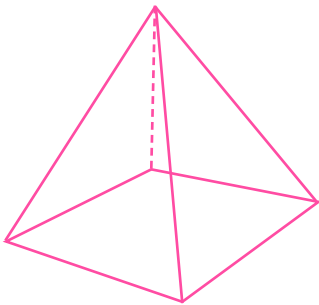
Which attributes are common in the following figures.

1)



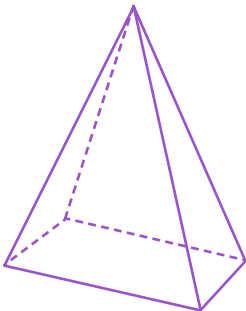
\_\_\_\_\_

2)



\_\_\_\_\_

3)



\_\_\_\_\_