






NAME _____ DATE _____



IDENTIFY 2-DIMENSIONAL SHAPES

Identify the right one.

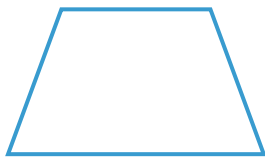

1. Which of these is oval?



2. Which of these is rhombus?



3. Which of these is a hexagon?



4. Which of these is a trapezium?

