



NAME \_\_\_\_\_

DATE \_\_\_\_\_

## COMPARING LENGTHS

Resemblance of quantities.

1) Put the candles in order from shortest to tallest.



A



B




C

Correct order:

Candle \_\_\_ is shortest.

Candle \_\_\_ is tallest.

2) Put the balloons in order from shortest to tallest.



A



B



C

Correct order:

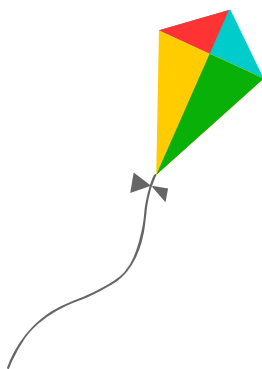
Balloons \_\_\_ is shortest.

Balloons \_\_\_ is tallest.

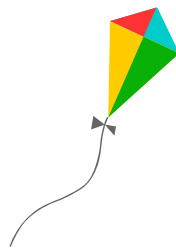
3) Put the kites in order from shortest to tallest.



A



B



C

Correct order:

Kite \_\_\_ is shortest.

Kite \_\_\_ is tallest.