



NAME _____ DATE _____

MEASURING LENGTHS

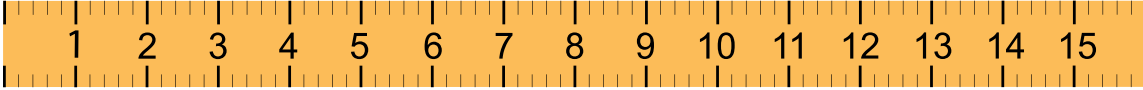
Measuring length of objects using centimeter ruler.

Example:

Measure the length of the pencil and write the length in the blank given.



The pencil is 6 cm long.




1) Measure the length of the brush and write the length in the blank given.




The brush is _____ long.

2) Measure the length of the comb and write the length in the blank given.



The comb is _____ long.

3) Measure the length of the clarinet and write the length in the blank given.



The clarinet is _____ long.