



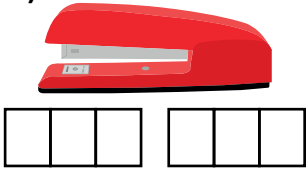
NAME _____

DATE _____

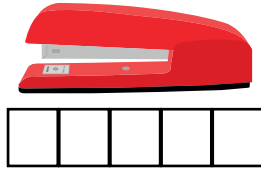
MEASURING LENGTHS

Circle the picture that shows correct way to measure.

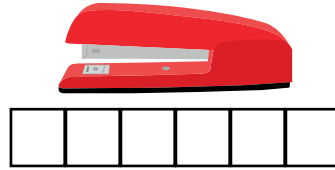
1)



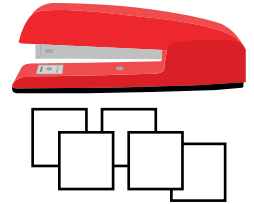
6 centimeter
cubes



5 centimeter
cubes

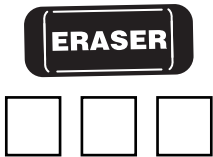


6 centimeter
cubes

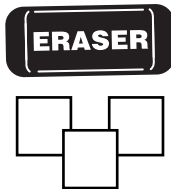


5 centimeter
cubes

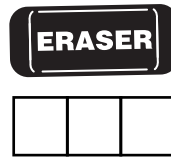
2)



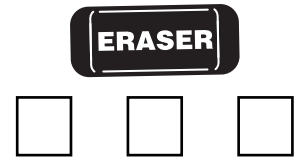
3 centimeter
cubes



3 centimeter
cubes

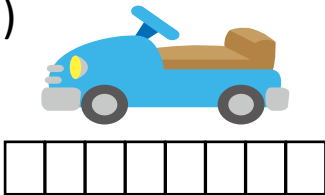


3 centimeter
cubes

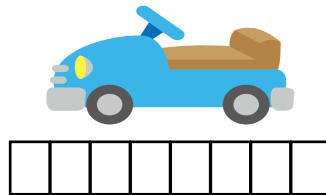


3 centimeter
cubes

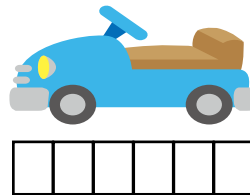
3)



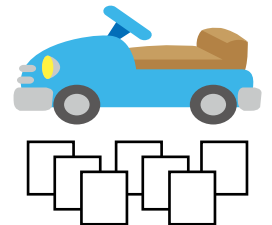
8 centimeter
cubes



8 centimeter
cubes



6 centimeter
cubes

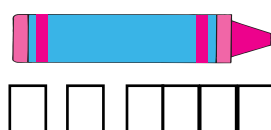


7 centimeter
cubes

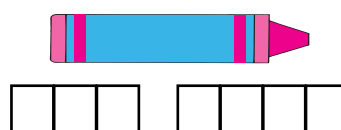
4)



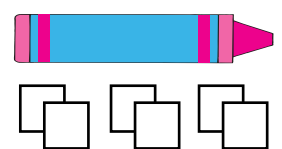
7 centimeter
cubes



6 centimeter
cubes



7 centimeter
cubes



6 centimeter
cubes