



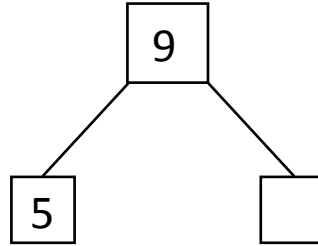
NAME _____

DATE _____

MIXED OPERATIONS

Read the following questions and fill the number bond. Write an addition and subtraction number sentences that match the story.

- 1) The teacher has brought 9 charts to the class. He gave 5 charts to boys and the remaining charts to girls. How many charts did the teacher gave to girls?

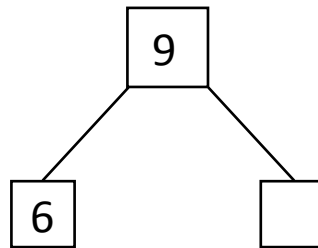


$$\boxed{5} + \boxed{} = \boxed{9}$$

$$\boxed{9} - \boxed{5} = \boxed{}$$

The teacher gave ___ charts to the girls.

- 2) There are 9 soaps in the house and 6 soaps already used. How many number of soaps are there which are not yet used?

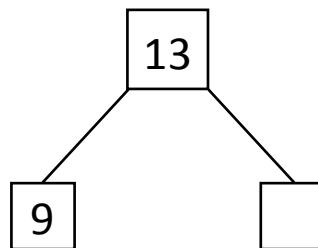


$$\boxed{9} - \boxed{6} = \boxed{}$$

$$\boxed{6} + \boxed{3} = \boxed{}$$

There are ___ soaps to be used.

- 3) There are 13 dollars with William. He expended 9 dollars to buy a gift. How many dollars are left with him?



$$\boxed{9} + \boxed{} = \boxed{13}$$

$$\boxed{13} - \boxed{9} = \boxed{}$$

William have ___ Dollars at present.