



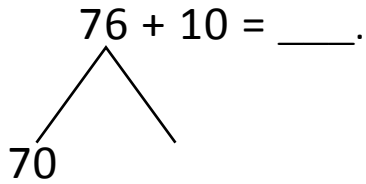
NAME _____ DATE _____

NUMBER BONDS AND ARROW WAY METHODS

Add the following expressions using number bonds and arrow way methods.

a) $76 + 10 = \underline{\quad}$.

Number bond:



$70 + 10 = \underline{\quad}$.

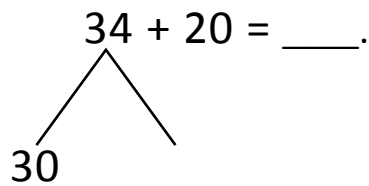
$80 + \underline{\quad} = 86$

Arrow way:



b) $34 + 20 = \underline{\quad}$.

Number bond:



$30 + 20 = \underline{\quad}$.

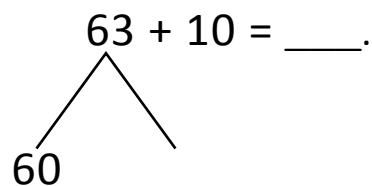
$50 + \underline{\quad} = 54$

Arrow way:



c) $63 + 10 = \underline{\quad}$.

Number bond:



$60 + 10 = \underline{\quad}$.

$70 + 3 = \underline{\quad}$.

Arrow way:

