



NAME _____

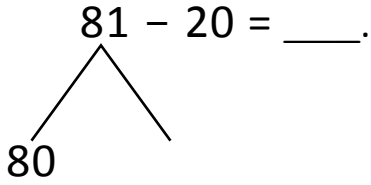
DATE _____

NUMBER BONDS AND ARROW WAY METHODS

Subtract the following expressions using number bonds and arrow way methods.

a) $81 - 20 = \underline{\quad}$.

Number bond:



$80 - 20 = \underline{\quad}$.

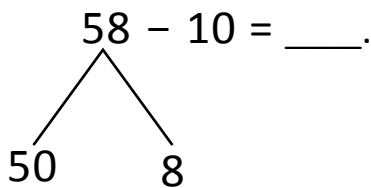
$60 + \underline{\quad} = 61$

Arrow way:



b) $58 - 10 = \underline{\quad}$.


Number bond:



$50 - \underline{\quad} = 40$

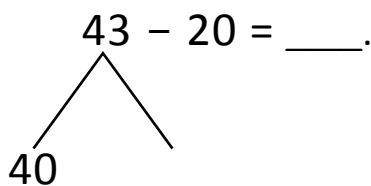
$40 + \underline{\quad} = 48$

Arrow way:



c) $43 - 20 = \underline{\quad}$.

Number bond:



$40 - 20 = \underline{\quad}$.

$20 + \underline{\quad} = 23$

Arrow way:

