



NAME _____

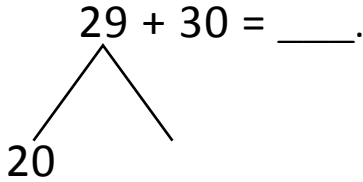
DATE _____

NUMBER BONDS AND ARROW WAY METHODS

Add the following expressions using number bonds and arrow way methods.

a) $29 + 30 = \underline{\quad}$.

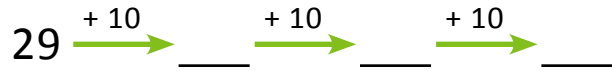
Number bond:



$20 + 30 = \underline{\quad}$.

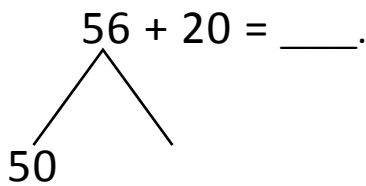
$50 + \underline{\quad} = 59$

Arrow way:



b) $56 + 20 = \underline{\quad}$.

Number bond:



$50 + \underline{\quad} = 70$

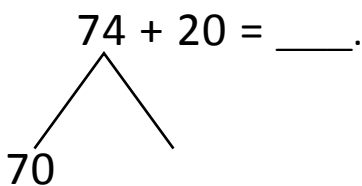
$70 + \underline{\quad} = 76$

Arrow way:



c) $74 + 20 = \underline{\quad}$.

Number bond:



$70 + 20 = \underline{\quad}$.

$90 + \underline{\quad} = 94$

Arrow way:

