



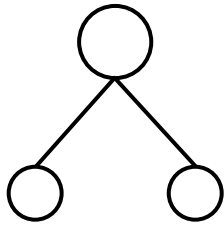
NAME \_\_\_\_\_

DATE \_\_\_\_\_

## ADDITIONS

Using 5 groups show how to make ten and taking from ten to solve the two number sentences. Make a number bond and write additional number sentences that would have this number bond.

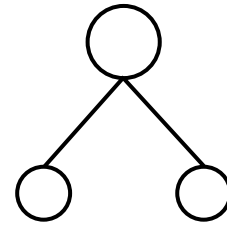
1)  $9 + 8 = \underline{\quad}$



---

---

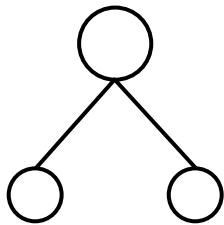
2)  $17 - 9 = \underline{\quad}$



---

---

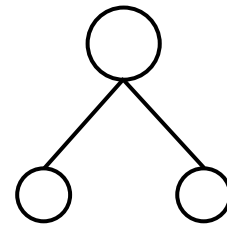
3)  $9 + 4 = \underline{\quad}$



---

---

4)  $13 - 9 = \underline{\quad}$



---

---