




NAME _____

DATE _____

SUBTRACTIONS


See the picture and fill in the math story. Also show in a number bond.

1)



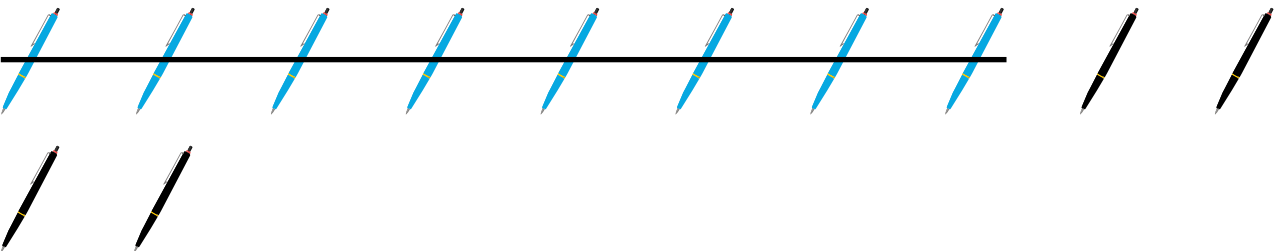
Dora has ___ bunches of grapes. She ate ___ bunches of grapes. How many bunches of grapes are left?

2)



In a bouquet there are ___ flowers. ___ flowers are orange color. How many flowers are red color?

3)



Roger has ___ pens. He has ___ blue pens and remaining are black pens. How many black pens Roger have?