



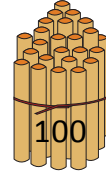
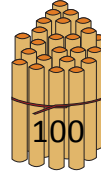
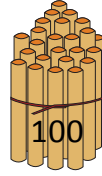
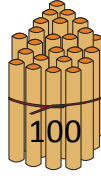
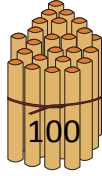

NAME \_\_\_\_\_

DATE \_\_\_\_\_

## COUNTING THE NUMBERS

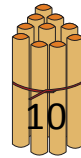
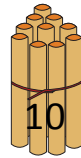
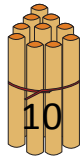
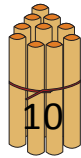
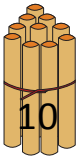
Counting the numbers by making the bundles 1's, 10's and 100's.

a) Bundles of 100's.



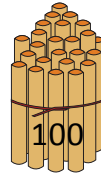
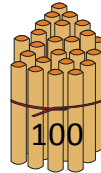
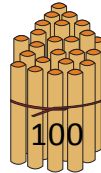
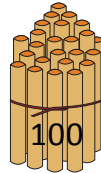
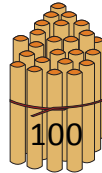
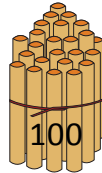


6 hundreds = \_\_\_\_\_.

b) Bundles of 10's.



5 tens = \_\_\_\_\_.

c) Bundles of 100's.



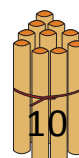
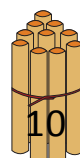
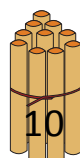
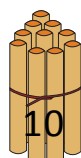
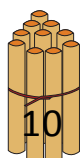
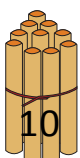
8 hundreds = \_\_\_\_\_.

d) Bundles of 1's.



9 ones = \_\_\_\_\_.

e) Bundles of 10's.



6 tens = \_\_\_\_\_.