

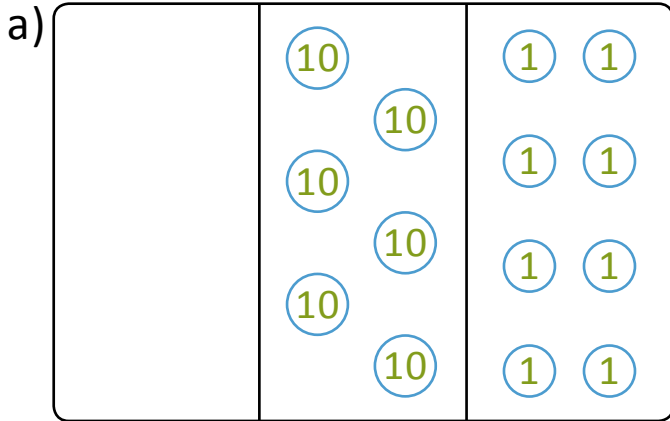


NAME _____ DATE _____


FINDING NUMBERS BY CONVERSION

Conversion of ones into tens and tens into hundreds by using place value charts.

1) i) Tell the value of the following numbers.



a) _____



b) _____

ii) Fill in the sentences below to tell about the change from 68 to 680.

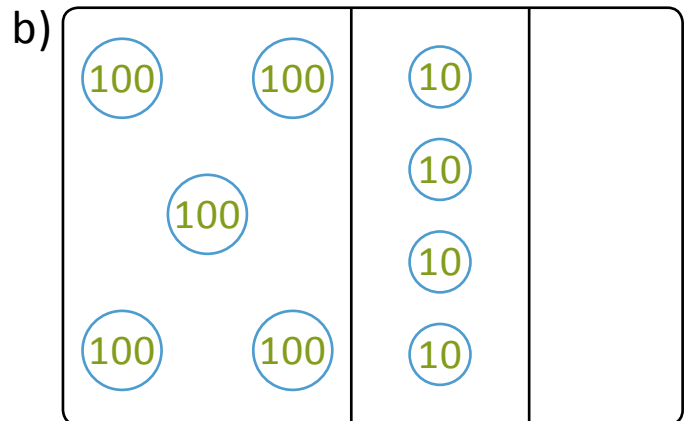
I changed _____ to _____.

I changed _____ to _____.

2) i) Tell the value of the following numbers.



a) _____



b) _____

ii) Fill in the sentences below to tell about the change from 54 to 540.

I changed _____ to _____.

I changed _____ to _____.