

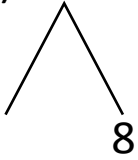


NAME _____ DATE _____

ADDITION OF TWO DIGIT NUMBERS

Solve using number bonds. Write the two number sentences that show that you added the ten first. Draw quick tens and ones.

a) $18 + 16 = \underline{\quad}$

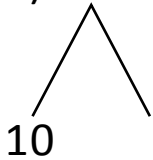


+

$16 + 10 = \underline{\quad}$

$\underline{\quad} + 8 = \underline{\quad}$

b) $13 + 24 = \underline{\quad}$

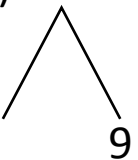


+

$24 + 10 = \underline{\quad}$

$\underline{\quad} + 3 = \underline{\quad}$

c) $19 + 13 = \underline{\quad}$

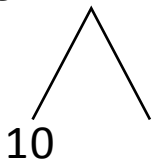


+

$13 + 10 = \underline{\quad}$

$\underline{\quad} + 9 = \underline{\quad}$

d) $18 + 14 = \underline{\quad}$



+

$18 + 10 = \underline{\quad}$

$\underline{\quad} + 4 = \underline{\quad}$