

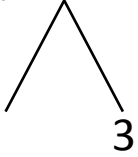


NAME _____ DATE _____

ADDITION OF TWO DIGIT NUMBERS

Solve using number bonds. Write the two number sentences that show that you added the ten first. Draw quick tens and ones.

a) $13 + 15 = \underline{\quad}$

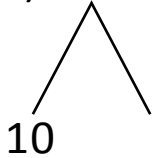


+

$15 + 10 = \underline{\quad}$

$\underline{\quad} + 3 = \underline{\quad}$

b) $11 + 9 = \underline{\quad}$

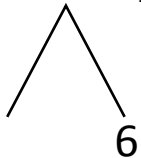


+

$9 + 10 = \underline{\quad}$

$\underline{\quad} + 1 = \underline{\quad}$

c) $23 + 16 = \underline{\quad}$

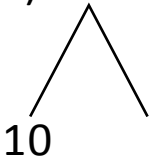


+

$23 + 10 = \underline{\quad}$

$\underline{\quad} + 6 = \underline{\quad}$

d) $12 + 16 = \underline{\quad}$



+

$16 + 10 = \underline{\quad}$

$\underline{\quad} + 2 = \underline{\quad}$