

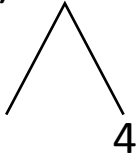


NAME \_\_\_\_\_ DATE \_\_\_\_\_

## ADDITION OF TWO DIGIT NUMBERS

Solve using number bonds. Write the two number sentences that show that you added the ten first. Draw quick tens and ones.

a)  $14 + 16 = \underline{\quad}$

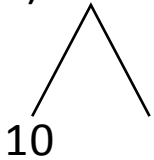


+

$16 + 10 = \underline{\quad}$

$\underline{\quad} + 4 = \underline{\quad}$

b)  $17 + 22 = \underline{\quad}$

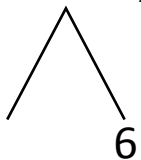


+

$22 + 10 = \underline{\quad}$

$\underline{\quad} + 7 = \underline{\quad}$

c)  $16 + 16 = \underline{\quad}$

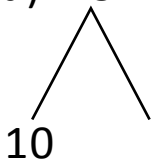


+

$16 + 10 = \underline{\quad}$

$\underline{\quad} + 6 = \underline{\quad}$

d)  $15 + 25 = \underline{\quad}$



+

$25 + 10 = \underline{\quad}$

$\underline{\quad} + 5 = \underline{\quad}$