

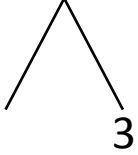


NAME _____ DATE _____

ADDITION OF TWO DIGIT NUMBERS

Solve using number bonds. Write the two number sentences that show that you added the ten first. Draw quick tens and ones.

a) $13 + 19 = \underline{\quad}$

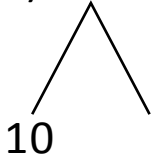


+

$19 + 10 = \underline{\quad}$

$\underline{\quad} + 6 = \underline{\quad}$

b) $12 + 21 = \underline{\quad}$

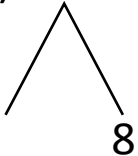


+

$21 + 10 = \underline{\quad}$

$\underline{\quad} + 2 = \underline{\quad}$

c) $18 + 20 = \underline{\quad}$

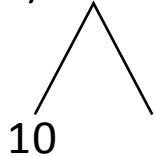


+

$20 + 10 = \underline{\quad}$

$\underline{\quad} + 8 = \underline{\quad}$

d) $13 + 18 = \underline{\quad}$



+

$18 + 10 = \underline{\quad}$

$\underline{\quad} + 3 = \underline{\quad}$