

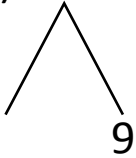


NAME \_\_\_\_\_ DATE \_\_\_\_\_

## ADDITION OF TWO DIGIT NUMBERS

Solve using number bonds. Write the two number sentences that show that you added the ten first. Draw quick tens and ones.

a)  $19 + 18 = \underline{\quad}$

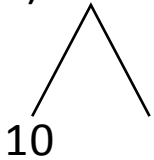


+

$18 + 10 = \underline{\quad}$

$\underline{\quad} + 9 = \underline{\quad}$

b)  $15 + 20 = \underline{\quad}$

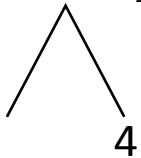


+

$20 + 10 = \underline{\quad}$

$\underline{\quad} + 5 = \underline{\quad}$

c)  $23 + 14 = \underline{\quad}$

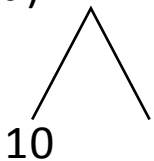


+

$23 + 10 = \underline{\quad}$

$\underline{\quad} + 4 = \underline{\quad}$

d)  $12 + 15 = \underline{\quad}$



+

$15 + 10 = \underline{\quad}$

$\underline{\quad} + 2 = \underline{\quad}$