

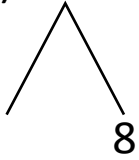


NAME _____ DATE _____

ADDITION OF TWO DIGIT NUMBERS

Solve using number bonds. Write the two number sentences that show that you added the ten first. Draw quick tens and ones.

a) $18 + 13 = \underline{\quad}$

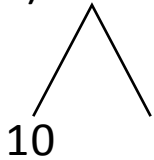


+

$13 + 10 = \underline{\quad}$

$\underline{\quad} + 8 = \underline{\quad}$

b) $13 + 21 = \underline{\quad}$

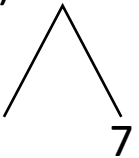


+

$21 + 10 = \underline{\quad}$

$\underline{\quad} + 3 = \underline{\quad}$

c) $17 + 12 = \underline{\quad}$

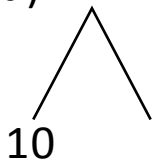


+

$12 + 10 = \underline{\quad}$

$\underline{\quad} + 7 = \underline{\quad}$

d) $11 + 15 = \underline{\quad}$



+

$15 + 10 = \underline{\quad}$

$\underline{\quad} + 1 = \underline{\quad}$