

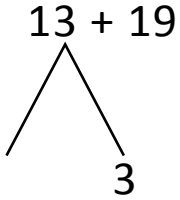


NAME _____ DATE _____

ADDITION OF TWO DIGIT NUMBERS

Solve using quick ten drawing, number bonds and the arrow way.

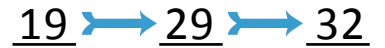
a) Number bond:



Quick ten drawings:



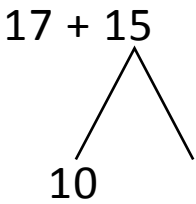
Arrow way:




$$19 + 10 = \underline{\quad}$$

$$\underline{\quad} + 3 = \underline{\quad}$$

b) Number bond:



Quick ten drawings:



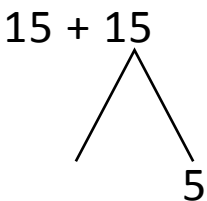
Arrow way:



$$17 + 10 = \underline{\quad}$$

$$\underline{\quad} + 5 = \underline{\quad}$$

c) Number bond:



Quick ten drawings:



Arrow way:



$$15 + 10 = \underline{\quad}$$

$$\underline{\quad} + 5 = \underline{\quad}$$