



NAME \_\_\_\_\_

DATE \_\_\_\_\_

# WAYS TO MAKE 10!


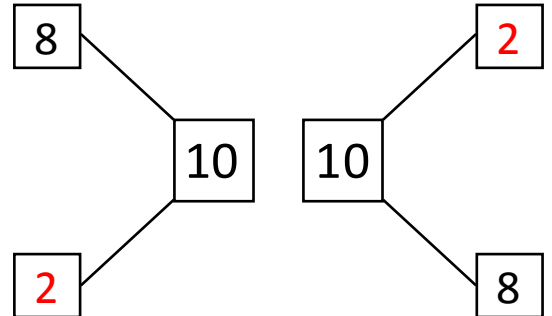
Use the picture to help you write all of the different ways to make 10.

Example:




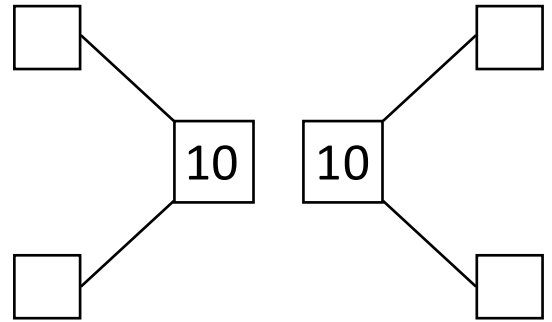
$$\boxed{8} + \boxed{2}$$

$$\boxed{2} + \boxed{8}$$




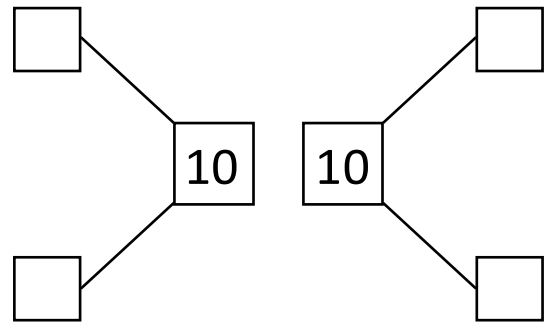
$$\boxed{7} + \boxed{\phantom{0}}$$

$$\boxed{3} + \boxed{\phantom{0}}$$



$$\boxed{10} + \boxed{\phantom{0}}$$

$$\boxed{0} + \boxed{\phantom{0}}$$



$$\boxed{9} + \boxed{\phantom{0}}$$

$$\boxed{1} + \boxed{\phantom{0}}$$

