



NAME _____

DATE _____



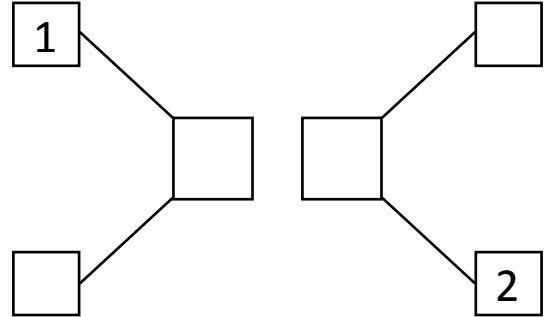
WAYS TO MAKE 10!

Use the picture to help you write all of the different ways to make 10.



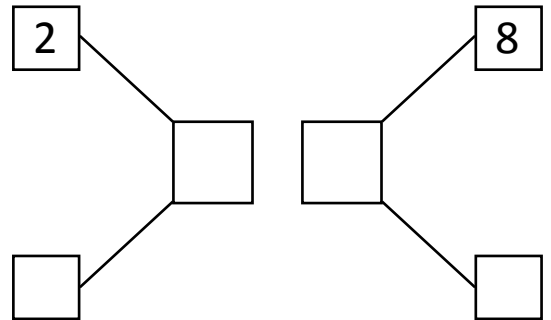
$$\square + 9$$

$$9 + \square$$



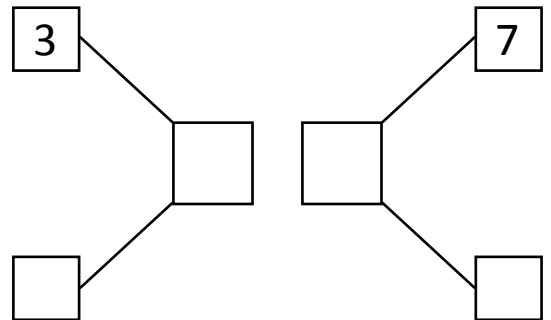
$$\square + 8$$

$$8 + \square$$



$$3 + \square$$

$$7 + \square$$



$$\square + 6$$

$$6 + \square$$

