



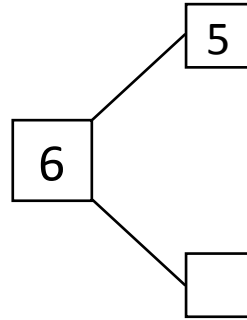

NAME _____

DATE _____

WAYS TO MAKE 6!

Complete the number bond and number sentence.

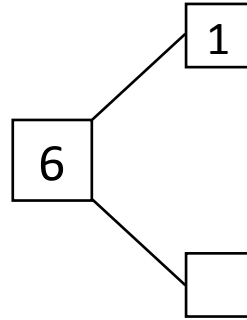

1) Circle 5. How many more does 5 need to make 6?



$$\square + 5 = 6$$

$$5 + \square = 6$$

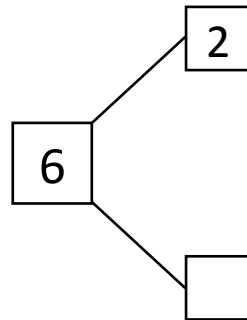

2) Circle 1. How many more does 1 need to make 6?



$$1 + \square = 6$$

$$6 = 1 + \square$$

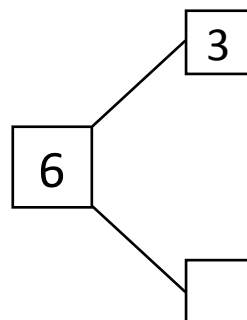

3) Circle 2. How many more does 2 need to make 6?



$$2 + \square = 6$$

$$6 = 2 + \square$$

4) Circle 3. How many more does 3 need to make 6?



$$3 + \square = 6$$

$$6 = \square + 3$$