




NAME \_\_\_\_\_

DATE \_\_\_\_\_

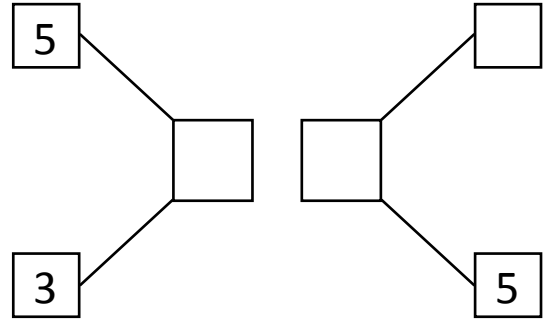
# WAYS TO MAKE 8!

Use the picture to help you write all of the different ways to make 8.



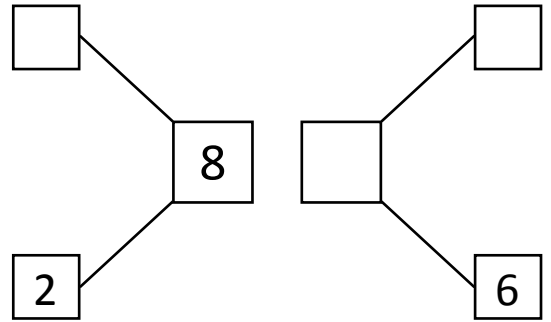
$$\boxed{5} + \boxed{\phantom{0}}$$

$$\boxed{\phantom{0}} + \boxed{5}$$





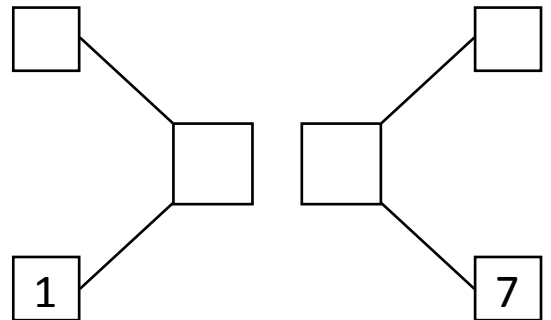
$$\boxed{\phantom{0}} + \boxed{2}$$

$$\boxed{2} + \boxed{\phantom{0}}$$



$$\boxed{\phantom{0}} + \boxed{1}$$

$$\boxed{1} + \boxed{\phantom{0}}$$



$$\boxed{8} + \boxed{\phantom{0}}$$

$$\boxed{\phantom{0}} + \boxed{8}$$

