



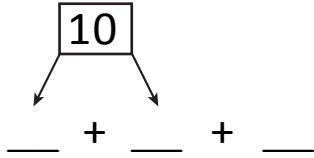
NAME _____

DATE _____

ADDING THREE NUMBERS

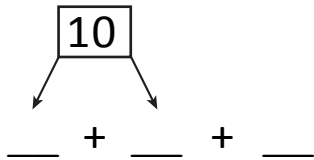
Circle the numbers that make ten. Use number bonds and complete number sentences.

1) $9 + 1 + 3 = \square$



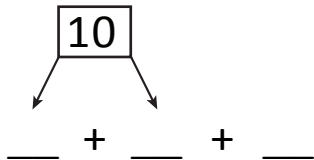
$\boxed{10} + \underline{\quad} = \underline{\quad}$

2) $8 + 2 + 7 = \square$



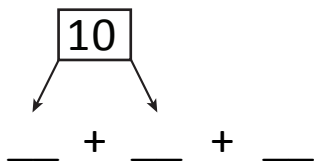
$\boxed{10} + \underline{\quad} = \underline{\quad}$

3) $6 + 4 + 3 = \square$



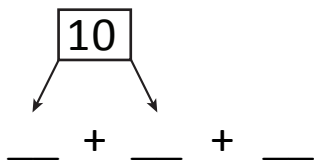
$\boxed{10} + \underline{\quad} = \underline{\quad}$

4) $1 + 2 + 9 = \square$



$\boxed{10} + \underline{\quad} = \underline{\quad}$

5) $2 + 8 + 7 = \square$



$\boxed{10} + \underline{\quad} = \underline{\quad}$