



NAME _____

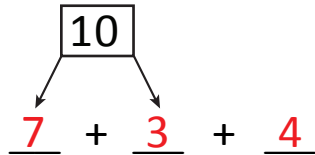
DATE _____

ADDING THREE NUMBERS

Circle the numbers that make ten. Use number bonds and complete number sentences.

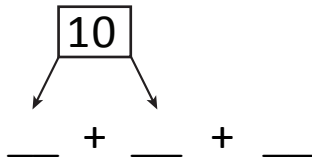
Example:

$$4 + \textcircled{3} + \textcircled{7}$$



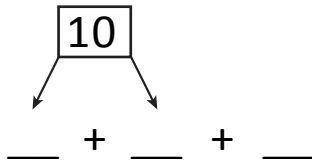
$$\boxed{10} + \underline{4} = \underline{14}$$

2) $6 + 6 + 4$



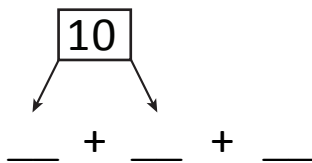
$$\boxed{10} + \underline{\quad} = \underline{\quad}$$

3) $2 + 8 + 1$



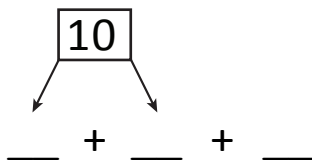
$$\boxed{10} + \underline{\quad} = \underline{\quad}$$

4) $8 + 5 + 5$



$$\boxed{10} + \underline{\quad} = \underline{\quad}$$

5) $5 + 7 + 3$



$$\boxed{10} + \underline{\quad} = \underline{\quad}$$