



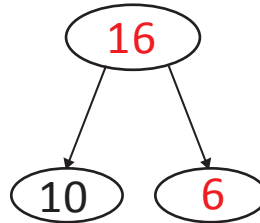
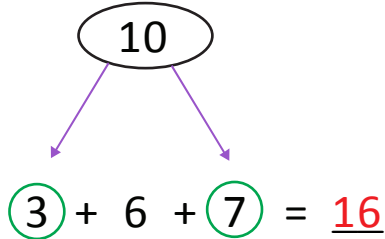
NAME _____

DATE _____

ADDING THREE NUMBERS

Select the numbers that make ten. Put them into a number bond and solve.
Write the new number bond.

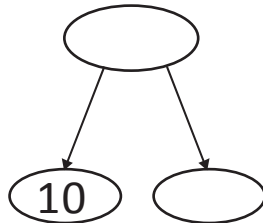
Example:



$$10 + 6 = 16$$

1) 10

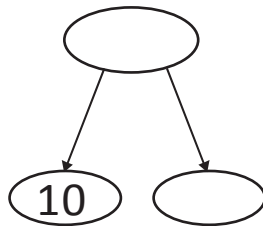
$$2 + 1 + 8 = \underline{\quad}$$



$$10 + \underline{\quad} = \underline{\quad}$$

2) 10

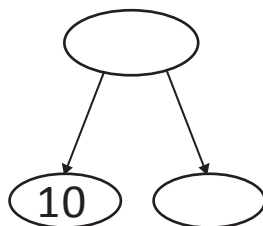
$$9 + 2 + 1 = \underline{\quad}$$



$$10 + \underline{\quad} = \underline{\quad}$$

3) 10

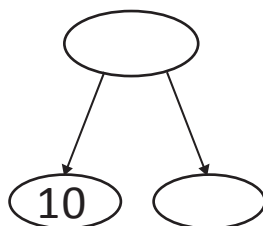
$$4 + 6 + 2 = \underline{\quad}$$



$$10 + \underline{\quad} = \underline{\quad}$$

4) 10

$$5 + 2 + 5 = \underline{\quad}$$



$$10 + \underline{\quad} = \underline{\quad}$$