



NAME _____

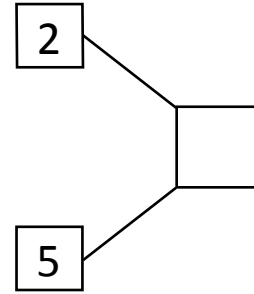
DATE _____

NUMBER BOND

Fill in the number bond for given number sentences.

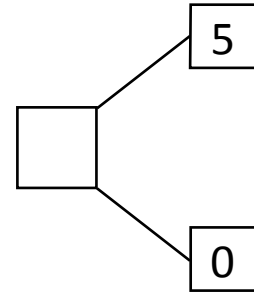
1)

$$\square + 5 = 7$$



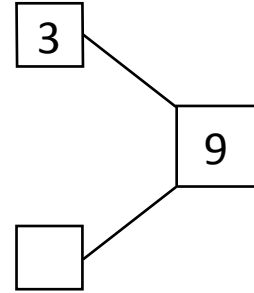
2)

$$\square + 0 = 5$$



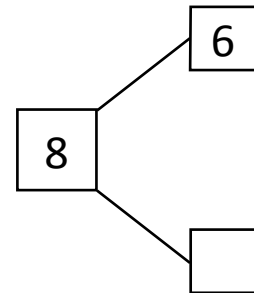
3)

$$3 + \square = 9$$



4)

$$\square + 2 = 8$$



5)

$$8 + \square = 9$$

