



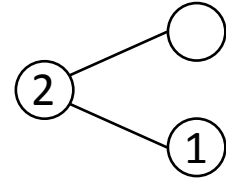
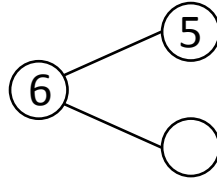
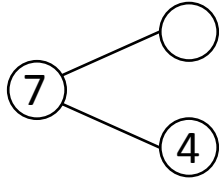
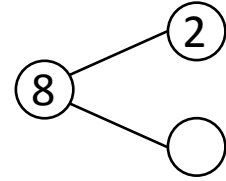
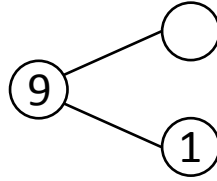
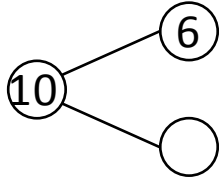
NAME _____

DATE _____

ADDITIONS (USING NUMBER BONDS)

Complete the number bonds.

1)



Fill in the missing numbers that make the number sentences true.

$6 + 4 = \underline{\quad}$

$2 + \underline{\quad} = 8$

$8 + 1 = \underline{\quad}$

$1 + \underline{\quad} = 2$

$2 + 6 = \underline{\quad}$

$\underline{\quad} + 1 = 6$

$1 + 1 = \underline{\quad}$

$\underline{\quad} + 1 = 9$

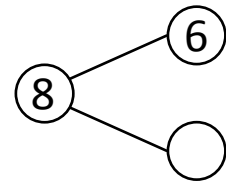
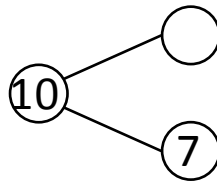
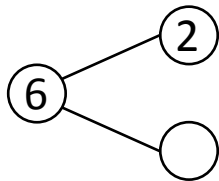
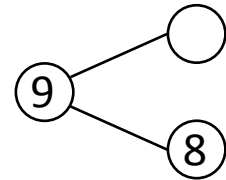
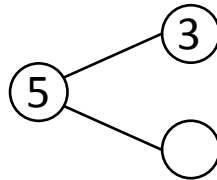
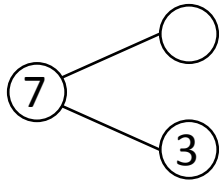
$5 + 1 = \underline{\quad}$

$3 + \underline{\quad} = 7$

$4 + 3 = \underline{\quad}$

$\underline{\quad} + 4 = 10$

2)



Fill in the missing numbers that make the number sentences true.

$6 + 2 = \underline{\quad}$

$\underline{\quad} + 4 = 6$

$4 + 3 = \underline{\quad}$

$1 + \underline{\quad} = 9$

$1 + 8 = \underline{\quad}$

$4 + \underline{\quad} = 7$

$2 + 4 = \underline{\quad}$

$\underline{\quad} + 2 = 5$

$3 + 2 = \underline{\quad}$

$6 + \underline{\quad} = 8$

$3 + 7 = \underline{\quad}$

$\underline{\quad} + 7 = 10$