



NAME _____

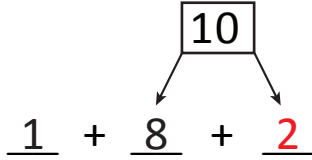

DATE _____

ADDING THREE NUMBERS

Draw a picture and complete the number sentences.

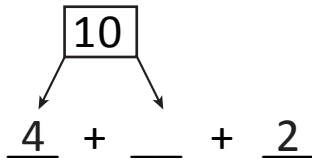
Example:

$$1 + 8 + 2 = \underline{11}$$



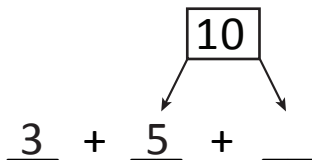
$$10 + \underline{1} = \underline{11}$$

1) $4 + 6 + 2 = \underline{\quad}$



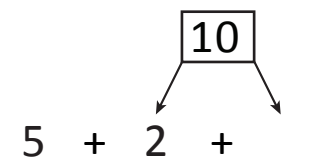
$$10 + \underline{\quad} = \underline{\quad}$$

2) $3 + 5 + 5 = \underline{\quad}$



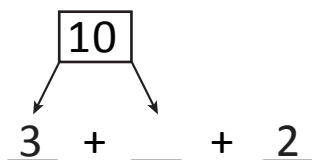
$$10 + \underline{\quad} = \underline{\quad}$$

3) $8 + 2 + 5 = \underline{\quad}$



$$10 + \underline{\quad} = \underline{\quad}$$

4) $2 + 7 + 3 = \underline{\quad}$



$$10 + \underline{\quad} = \underline{\quad}$$