




NAME _____

DATE _____

ADDITIONS


Solve by arranging 5 objects in each group and do addition of the following problems.

- 1) Charles has 14 fishes. 7 fishes are orange color and the remaining are gold fish. How many gold fish Charles have?




Charles has ___ gold fish.

- 2) Margaret counted 16 students in the class. 12 students went to dance class. How many students are remaining?




___ students are remaining in the class.

- 3) Daisy made 16 muffins. She gave 10 muffins to her friends. How many muffins are left?



Daisy is left with ___ muffins.

- 4) There are 16 mangoes on the tree. 7 mangoes fell down. How many mangoes are remaining?



There are ___ mangoes remaining on the tree.