



NAME _____

DATE _____

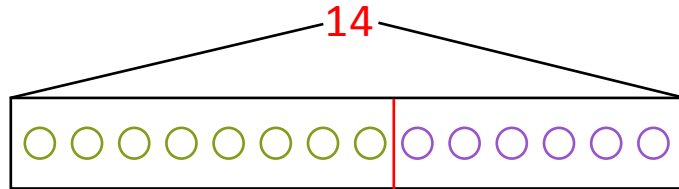
ADDITION WORD PROBLEMS

Read the word problem. Draw a tape diagram and label.

Write a number sentence and a statement that matches the story.

Example:

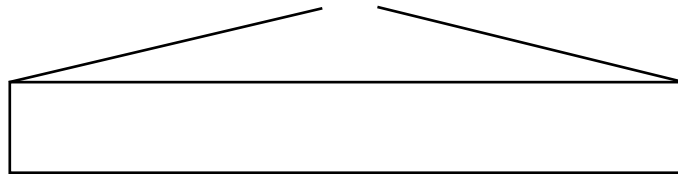
Emi has 8 red balloons and 6 pink balloons. How many balloons are there with Emi?



$8 + 6 = \underline{14}$

Emi has 14 balloons.

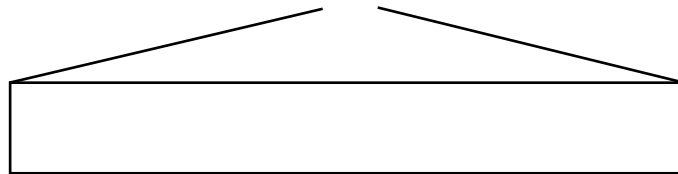
- 1) Tom has 6 cupcakes and his brother has 7 cupcakes. How many cupcakes Tom and his brother have?



$6 + 7 = \underline{\quad}$

Tom and his brother have cupcakes.

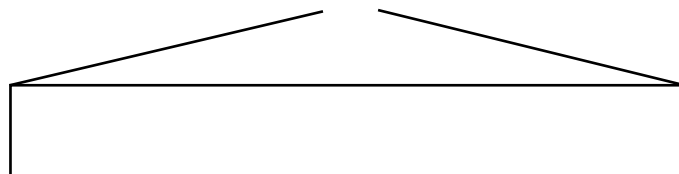
- 2) Rose has 9 squash and 5 pumpkins. How many vegetables Rose has?



$9 + 5 = \underline{\quad}$

Rose has vegetables.

- 3) Peter's team has 11 soccer balls on the field and 5 soccer balls in the coach's bag. How many soccer balls does Peter have?



$11 + 5 = \underline{\quad}$

Peter's team have soccer balls