




NAME \_\_\_\_\_

DATE \_\_\_\_\_

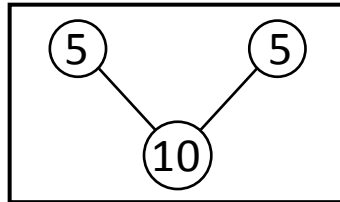
## ADDITION WORD PROBLEMS

Verify the work done by 3 friends stated as under. One of the works is wrong make it in correct procedure.


1. Lucy ate 5 blue berries at her friends home and 7 blue berries at her home.  
How many blue berries Lucy ate?



$$5 + 7 = 12$$

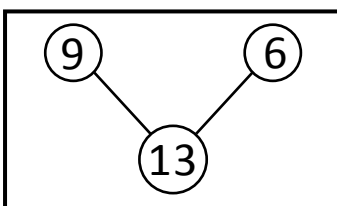


$$5 + 5 = 10$$

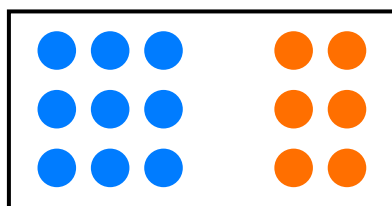


$$5 + 7 = 12$$

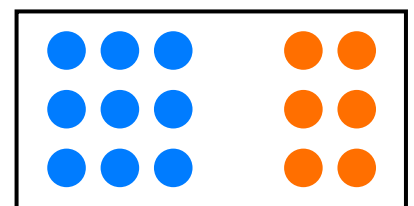
- 
2. There are some circles on the wall. 9 circles are painted with blue colour and 6 circles are painted with orange colour. How many circles are there on the wall?



$$9 + 6 = 13$$



$$9 + 6 = 15$$



$$9 + 6 = 15$$