

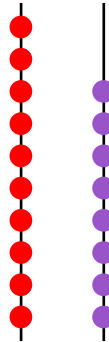
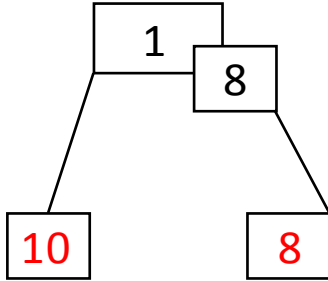


NAME \_\_\_\_\_

DATE \_\_\_\_\_

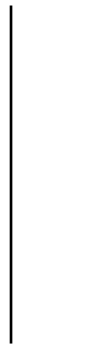
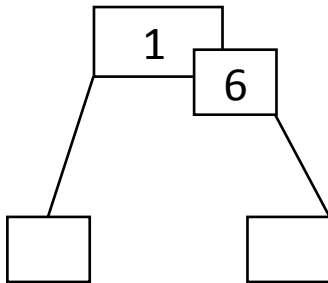
## COUNTING TENS AND ONES

Use the hide zero pictures to draw the tens and ones shown on the cards.  
Example:



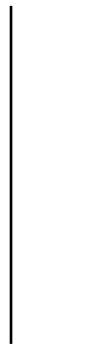
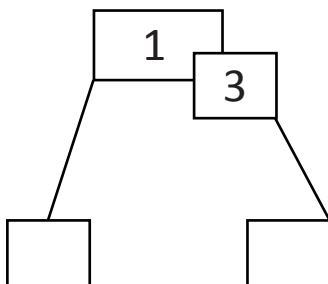
1 ten and 8 ones.

1)



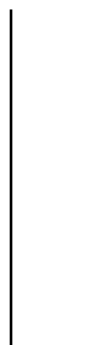
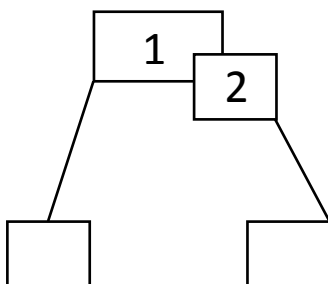
\_\_\_ ten and \_\_\_ ones.

2)



\_\_\_ ten and \_\_\_ ones.

3)



\_\_\_ ten and \_\_\_ ones.