





NAME \_\_\_\_\_ DATE \_\_\_\_\_

## COUNTING OBJECTS BY TENS AND ONES

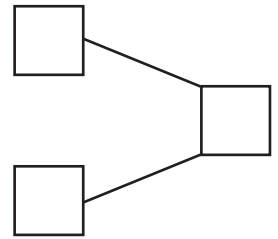
Count the objects and fill in the number bond and place value chart. Complete the number sentences by adding the tens and ones.

1)   $6 \times 10 = 60$   
  $7 \times 1 = 7$

\_\_\_ + \_\_\_ = \_\_\_.

\_\_\_ tens + \_\_\_ ones = \_\_\_.

Tens	Ones

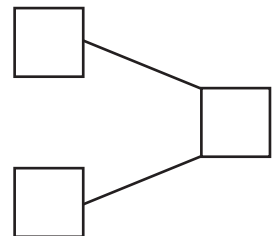



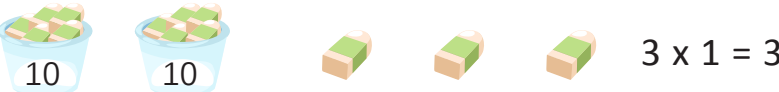
2)   $7 \times 10 = 70$   
  $4 \times 1 = 4$

\_\_\_ + \_\_\_ = \_\_\_.

\_\_\_ tens + \_\_\_ ones = \_\_\_.

Tens	Ones



3)   $6 \times 10 = 60$   
  $3 \times 1 = 3$

\_\_\_ + \_\_\_ = \_\_\_.

\_\_\_ tens + \_\_\_ ones = \_\_\_.

Tens	Ones

