



NAME _____

DATE _____

SUBTRACTIONS

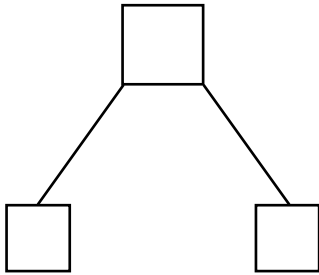
Make a math drawing and subtract. Write the related subtraction sentence and complete the number bond.

a) $10 - 8 = \underline{\quad}$

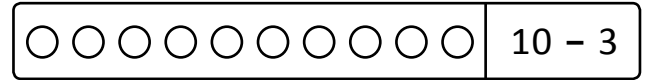


Related subtraction sentence:

$10 - 2 = \underline{\quad}$

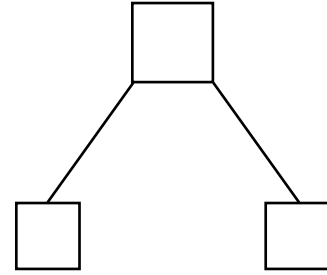


c) $10 - 3 = \underline{\quad}$

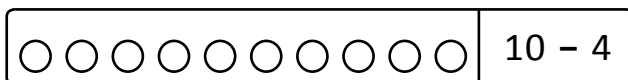


Related subtraction sentence:

$10 - 7 = \underline{\quad}$

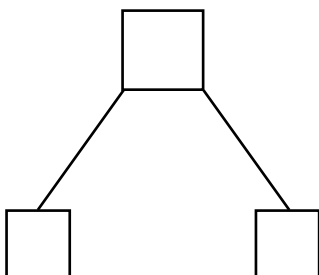


b) $10 - 4 = \underline{\quad}$

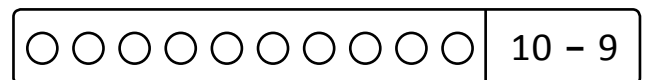


Related subtraction sentence:

$10 - 6 = \underline{\quad}$



d) $10 - 9 = \underline{\quad}$



Related subtraction sentence:

$10 - 9 = \underline{\quad}$

