



NAME \_\_\_\_\_

DATE \_\_\_\_\_

# SUBTRACTIONS


Round 10 and subtract.

Example:


$15 - 8 = \underline{7}.$




$12 - 8 = \underline{\quad}.$



$19 - 8 = \underline{\quad}.$



$13 - 8 = \underline{\quad}.$



$16 - 8 = \underline{\quad}.$

