



NAME \_\_\_\_\_

DATE \_\_\_\_\_

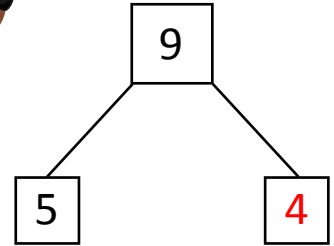

## SUBTRACTION WORD PROBLEMS

Read the story. Cross off the items that are leaving the story.

Then complete the number bond, number sentence and number statement.

Example:

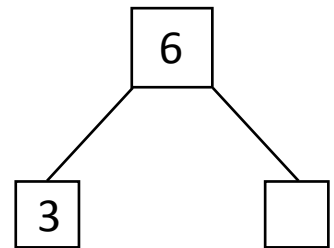
Rachel counted 9 dogs. 5 dogs are sleeping and remaining dogs are eating. How many dogs are eating?



$$9 - 5 = \underline{4}.$$

4 dogs are eating.

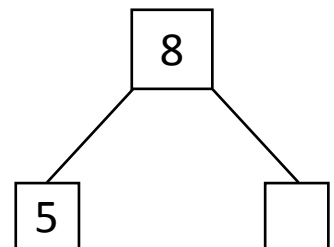
1) Harry has 6 books. He read 3 books. How many books are remaining?



$$6 - 3 = \underline{\quad}.$$

    books are remaining.

2) There are 8 muffins on the table. Missy ate 5 muffins. How many muffins are remaining on the table?



$$8 - 5 = \underline{\quad}.$$

There are     muffins remaining on the table.