



NAME _____

DATE _____

SUBTRACTION WORD PROBLEMS

Solve using simple math drawings to show how to solve with addition and subtraction. Label the number bond and write a statement.


1) There are 7 fishes in a basket.

3 fishes were sold

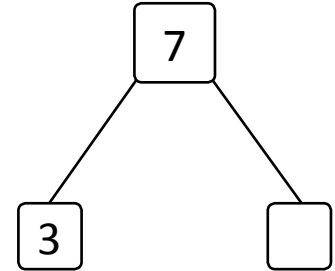
The rest of the fishes are in the basket.

How many fishes are with empty?

(Fishes sold)



(Fishes in the basket)



$$\boxed{3} + \boxed{} = \boxed{7}$$

$$\boxed{7} - \boxed{3} = \boxed{}$$

The rest of the ___ fishes are in the basket.

2) Pencil packets are 10 in a shop.

The shop keeper sold 3 packets.

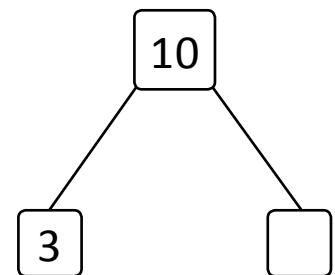
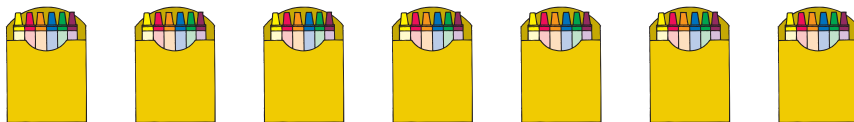
The rest of the packets are in the shop.

How many remaining packets are there in the shop?

(Pencil sold packets)



(Remaining pencil packets)



$$\boxed{3} + \boxed{} = \boxed{10}$$

$$\boxed{10} - \boxed{3} = \boxed{}$$

Remaining packets ___ are in the shop.