



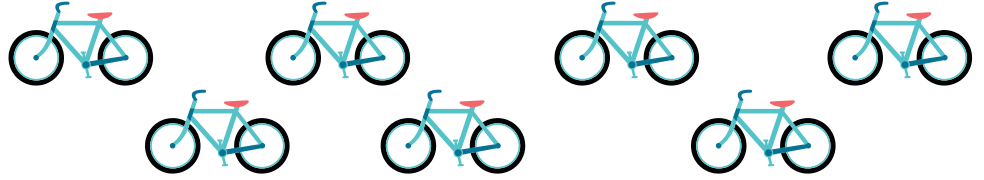
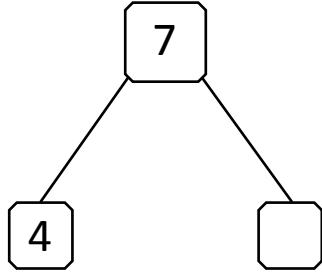
NAME _____

DATE _____

SUBTRACTION WORD PROBLEMS

Use the number bond to complete the number sentences. Use simple math drawings to tell math stories.

1)



$$\boxed{4} + \boxed{} = \boxed{7}$$


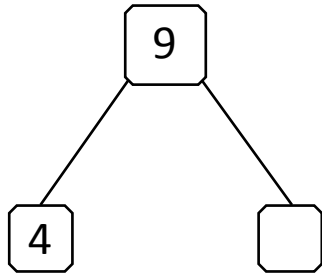
$$\boxed{7} - \boxed{} = \boxed{4}$$

There are ___ bicycles in a shop.

___ bicycles have and sold.

___ bicycles are still in the shop.

2)



$$\boxed{4} + \boxed{} = \boxed{9}$$

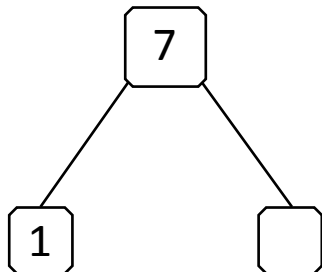
$$\boxed{9} - \boxed{} = \boxed{4}$$

There are ___ oranges on the table.

___ oranges have been eaten by boys.

___ oranges are still on the table.

3)



$$\boxed{1} + \boxed{} = \boxed{7}$$

$$\boxed{7} - \boxed{} = \boxed{1}$$

There are ___ bags on the floor.

___ bags are brown and ___ bag are red.