



NAME _____

DATE _____

SUBTRACTION WORD PROBLEMS


Complete the story and solve. Label the number bond. Complete the missing part in the number sentence and number bond.

1) Number of erasers ____.

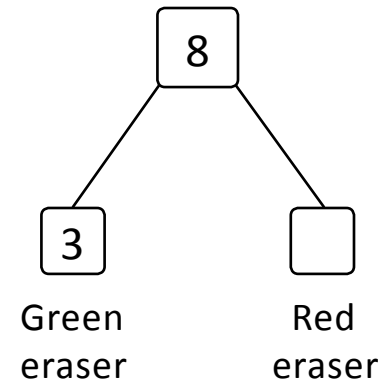
Number of green color erasers ____.

How many red color erasers are there?

Remaining red color erasers ____.



$$8 - 3 = \underline{\quad}$$




2) Number of tooth brushes ____.

Number of brushes are ____ in blue color.

How many green brushes are there?

Remaining brushes are ____ in green color.



$$10 - 2 = \underline{\quad}$$

