




NAME \_\_\_\_\_

DATE \_\_\_\_\_

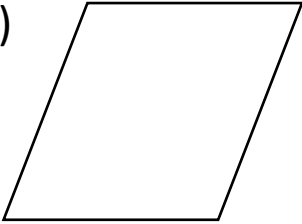
## TWO-DIMENSIONAL SHAPES

Match the following the number of sides and angles for each shape.

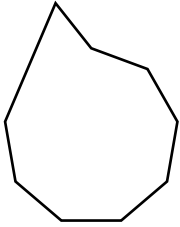
a)




b)



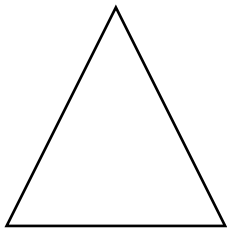
c)



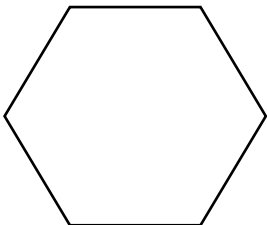
d)




e)



f)



g)



9 sides 9 angles.

12 sides 12 angles.

3 sides 3 angles.

5 sides 5 angles.

4 sides 4 angles.

7 sides 7 angles.

6 sides 6 angles.